




Find the  
odd numbers

1. 3. 5. 7. 9



Find the  
even numbers

0. 2. 4. 6. 8

# Missing Numbers

Fill in the missing number in each set.

